

Name \_\_\_\_\_


Period # \_\_\_\_\_

## The World Political

Use the maps and additional references to complete the following.

1. Label and color the continents.

Africa	green
Asia	orange
Europe	yellow
Australia	red
North America	brown
South America	purple
Antarctica	gray



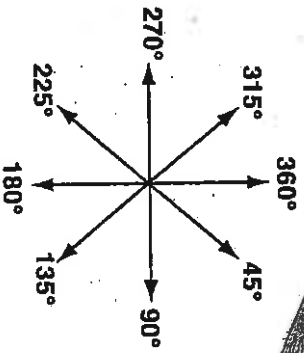
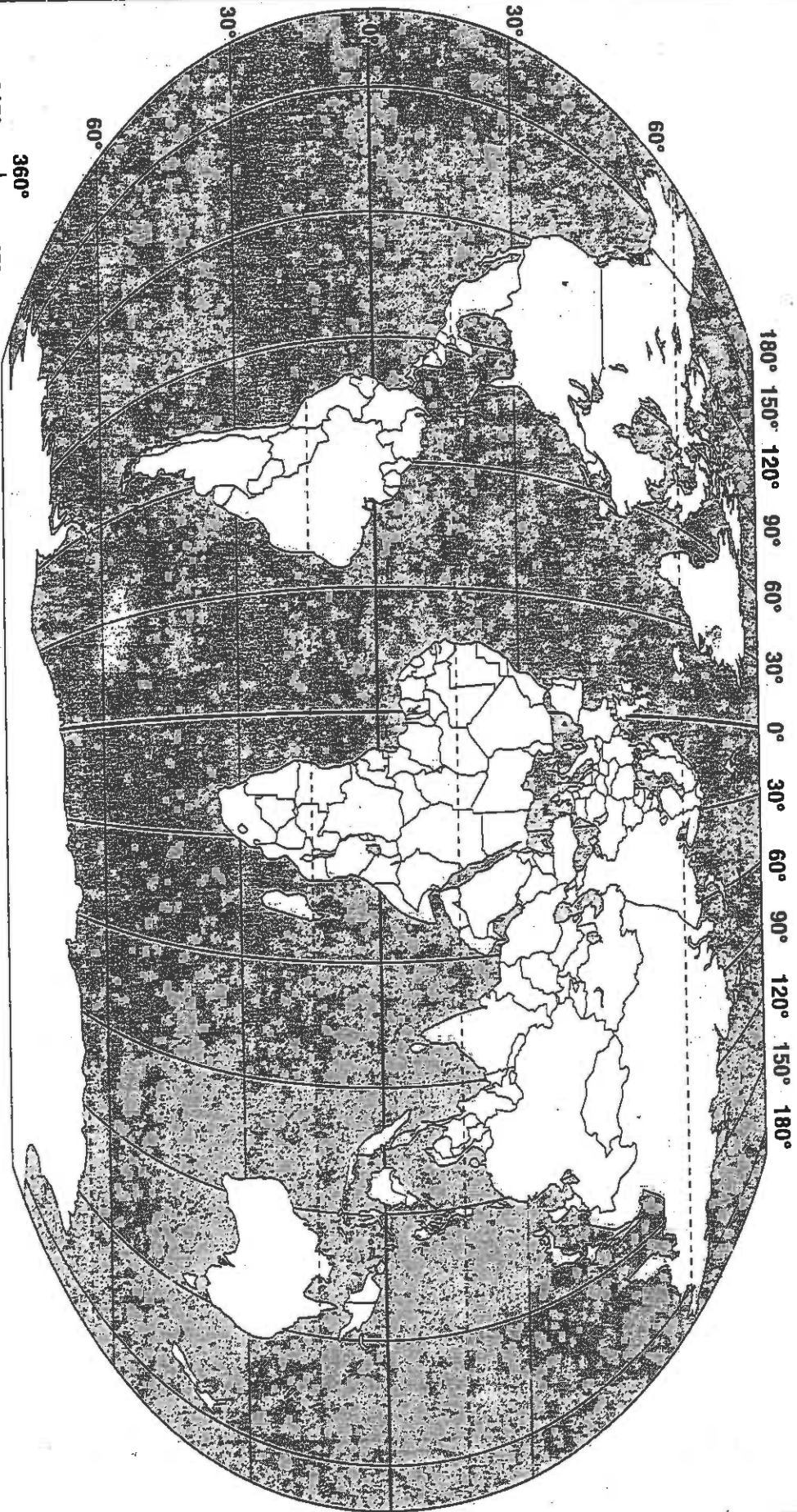
Score 1/25  
-1/2 pt each

2. Label these parallels and meridians: Equator, Tropic of Cancer, Tropic of Capricorn, Arctic Circle, Antarctic Circle, and Prime Meridian.
3. Label the North and South Poles.
4. Label the oceans: *Pacific, Atlantic, Indian, and Arctic.*
5. Label the compass rose on the map with these directions: north, south, east, west, northeast, southeast, northwest, and southwest.

Use the eight major directions or names of seas and continents to complete the following.

6. Europe is \_\_\_\_\_ of North America.
7. To travel from South America to Australia you would go West and cross the \_\_\_\_\_ Ocean.
8. Europe lies \_\_\_\_\_ of South America across the \_\_\_\_\_ Ocean.
9. Antarctica is \_\_\_\_\_ of Europe, Asia, and North America.
10. Africa lies \_\_\_\_\_ of Antarctica.
11. The continent of \_\_\_\_\_ is northeast of Africa.
12. The continent of \_\_\_\_\_ is east of Asia across the \_\_\_\_\_ Ocean.
13. The \_\_\_\_\_ Ocean separates Africa and Australia.
14. The continents of \_\_\_\_\_ and Asia are really parts of the same land mass.
15. North America is in the \_\_\_\_\_ and western hemispheres.
16. \_\_\_\_\_ and \_\_\_\_\_ are the two continents that are entirely in the Southern Hemisphere.
17. Asia is mostly in the northern and \_\_\_\_\_ hemispheres.
18. The Tropic of Cancer is in the \_\_\_\_\_ hemisphere.
19. The Equator separates the \_\_\_\_\_ and \_\_\_\_\_ hemispheres.
20. The \_\_\_\_\_ Meridian separates the eastern and \_\_\_\_\_ hemispheres.

# The World



# Physical Features of the World

Use the maps and additional references to complete the following.

Score 1/25  
-1/2 pt. each

1. Label Antarctica, Australia, Africa, Europe, Asia, North America, and South America.
  - a. Name the continent that is in the northern and western hemispheres. \_\_\_\_\_
  - b. What continent is partially in all four hemispheres? \_\_\_\_\_
2. Label the Equator, Prime Meridian, Tropic of Cancer, Tropic of Capricorn, Arctic Circle, Antarctic Circle, North Pole, and South Pole.
  - a. The Tropic of Capricorn and the Antarctic Circle are in what hemisphere? \_\_\_\_\_
  - b. The Prime Meridian passes through what three continents? \_\_\_\_\_
3. Label the *Indian Ocean*, *Arctic Ocean*, *Pacific Ocean*, and *Atlantic Ocean*.
  - a. Which ocean lies between Asia and North America? \_\_\_\_\_
  - b. Which ocean lies north of Europe? \_\_\_\_\_
4. Label the Rocky Mountains, Andes Mountains, Alps, Ural Mountains, and the Himalayas.
  - a. Which mountain range is the longest? \_\_\_\_\_
  - b. Which two ranges separate Europe and Asia? \_\_\_\_\_
5. Label the islands of Greenland, Madagascar, and New Guinea.
  - a. Greenland is in the North \_\_\_\_\_ Ocean.
  - b. Madagascar is in the \_\_\_\_\_ Ocean near the continent of \_\_\_\_\_.
6. Label the *Caribbean Sea*, *Mediterranean Sea*, *Arabian Sea*, and *South China Sea*.
  - a. The *Caribbean Sea* is between what two continents? \_\_\_\_\_
  - b. The *Mediterranean Sea* is bordered by what three continents? \_\_\_\_\_
7. Label Cape Horn, Cape of Good Hope (or Cape Agulhas), *Strait of Gibraltar*, and *Panama Canal*.
  - a. The *Strait of Gibraltar* connects what bodies of water? \_\_\_\_\_
  - b. The *Panama Canal* connects what two bodies of water? \_\_\_\_\_
8. Label the *Amazon River*, *Mississippi River*, *Zaire River*, and *Nile River*.
  - a. Which river is east of the Andes Mountains? \_\_\_\_\_
  - b. Which river flows almost straight north? \_\_\_\_\_
9. Label the Sahara, Gobi Desert, Kalahari Desert, and Atacama Desert.
  - a. Which desert is bigger than the continent of Australia? \_\_\_\_\_
  - b. Which desert lies east of 90°E? \_\_\_\_\_

# Physical Features of the World

